

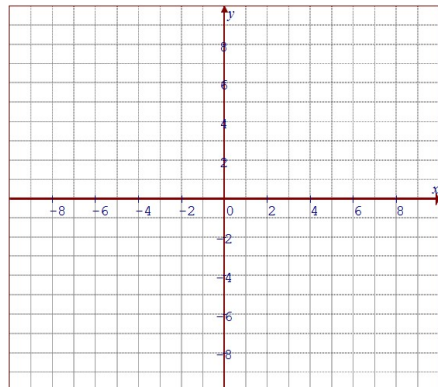
Name: _____

Date: _____

Math 10/11 Enriched: Section 5.6 Graphing Rational Functions and Applications

1. Given each equation below, graph it on the grid provided. Label all max. & min. points:

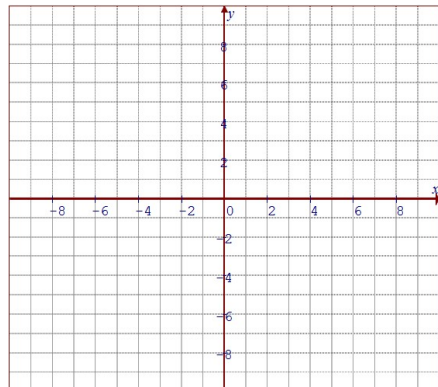
a) $y = \frac{4x}{x^2 + 1}$



Asymptotes:

D: _____ R: _____

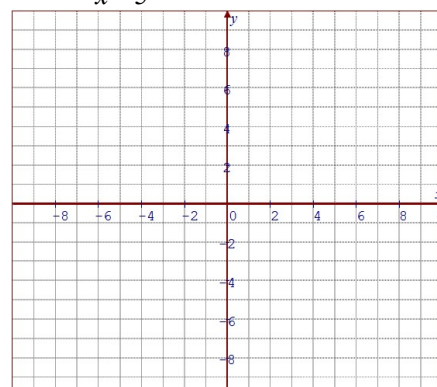
b) $y = \frac{x^2}{x^2 - 4}$



Asymptotes:

D: _____ R: _____

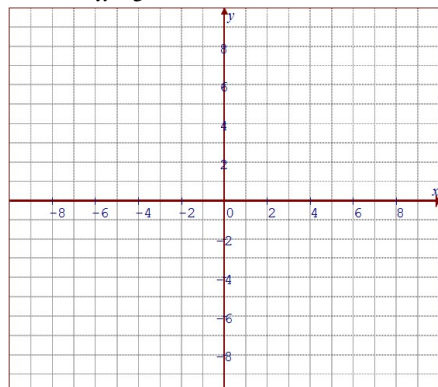
c) $y = \frac{x^2}{x - 5}$



Asymptotes:

D: _____ R: _____

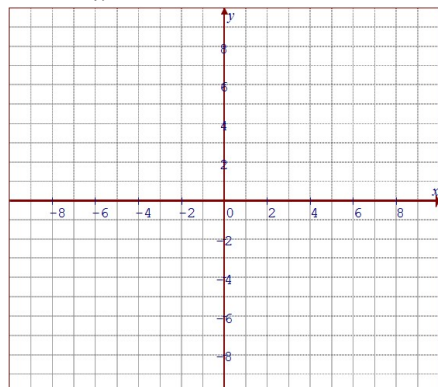
d) $y = \frac{x^2 - 9}{x - 3}$



Asymptotes:

D: _____ R: _____

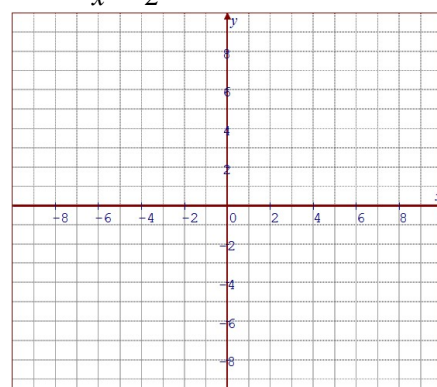
e) $y = \frac{-4x}{x^2 + 1}$



Asymptotes:

D: _____ R: _____

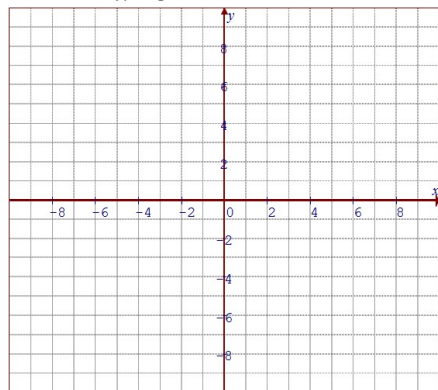
f) $y = \frac{x^2}{x^2 - 2}$



Asymptotes:

D: _____ R: _____

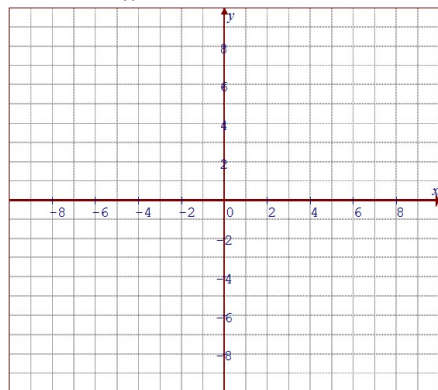
g) $y = \frac{x^3 - 3x^2}{x - 3}$



Asymptotes:

D: _____ R: _____

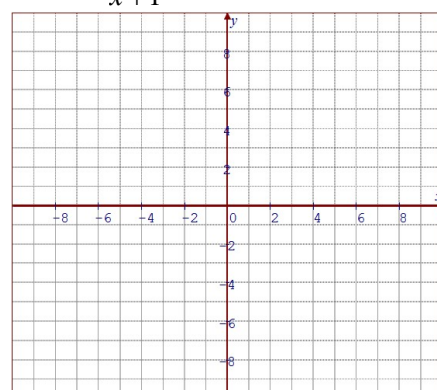
h) $y = \frac{x^2 + 4}{x}$



Asymptotes:

D: _____ R: _____

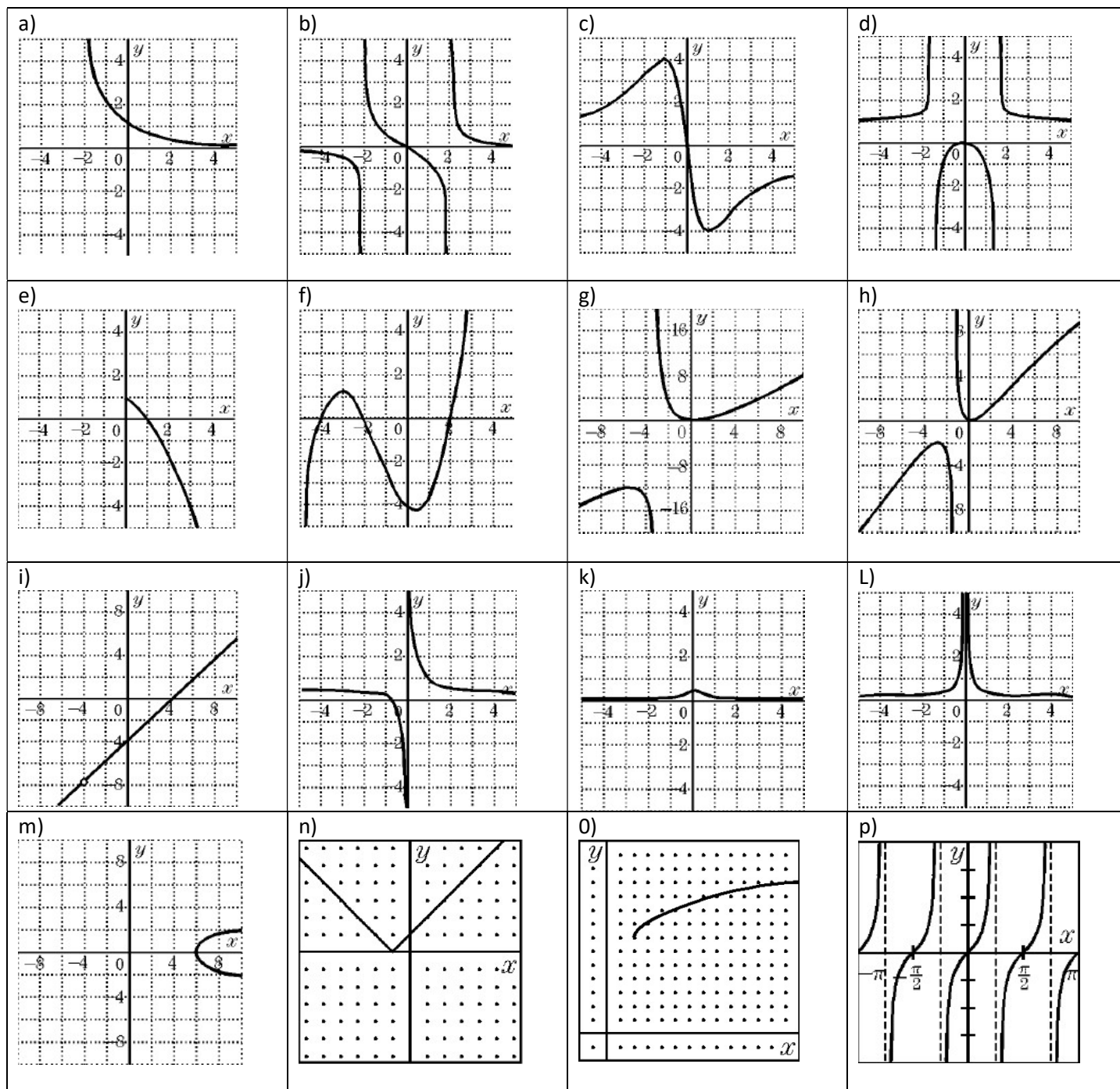
i) $y = \frac{(x + 3)^2}{x + 1}$



Asymptotes:

D: _____ R: _____

2. Indicate which of the following graphs are rational functions only. If not, indicate what kind of function it is. If it is, indicate the general formula of the function and draw all the asymptotes:



3. Indicate whether if the statement is A) Always True B) Sometimes True C) False

i) All polynomial functions are rational functions: _____

ii) All rational functions are polynomial functions: _____

iii) All reciprocal functions are rational functions: _____

iv) Rational functions have more than one asymptotes: _____

4. The average cost “A” dollars, of printing the school agenda is given by the equation: $A = \frac{2500 + 1.25n}{n}$, where “n” is the number printed.
- Graph the function $0 \leq n \leq 900$
 - Determine the average cost when 500 agendas are printed
 - Determine the number of agendas are printed when the average cost is \$8.00?
5. A packaging company makes boxes with sides 16.5cm, and a volume approximately 1050cm^3 . The company plans to redesign the boxes with a smaller base. The boxes must still have a square base and contain the same volume.
- Calculate the height of the box
 - Let “x” centimeters represent the change in the length of the base. Let “h” centimeters represent the change in height. Write “h” as a function of “x”
 - Graph the function
6. On the way from Vancouver to Seattle, the speed limit is 110km/h. Since the distance between the cities is approximately 230km, a trip between the two cities is about 2.1hours (Excluding border wait time). Cars travelling faster can reach their destination within 2.1 hours.
- Let “s” represent the change in speed compared with 110km/h. Let “t” represent the change in time compared with 2.1hrs. Write “t” as a function of “s”
 - How much time will you save driving at 125km/h?
 - At what speed does it take to save 10min?
 - Graph “t” against “s”

7. Find all the vertical and horizontal asymptotes for each of the following rational functions:

a) $y = \frac{1}{x+3}$

b) $y = \frac{3x}{x+4}$

c) $y = \frac{1}{x^2 + x - 42}$

d) $y = \frac{x^2}{x^2 - 16}$

e) $y = \frac{x}{x^2 + 3}$

f) $y = \frac{x^3}{6x^2 - x - 2}$

$$\text{g) } y = \frac{2x^2 + 5x - 3}{9 - x^2}$$

$$\text{h) } y = \frac{3x^4 - 27x^2}{x^3 - 3x^2 - 4x}$$

8. What are the vertical asymptote and horizontal asymptote for $f(x) = \frac{\sqrt{x}}{x+4}$?

9. Find all the vertical asymptotes for $f(x) = \frac{2x^3 + 12x^2 + 22x + 12}{x^2 + 6x + 8}$

10. Consider the function: $f(x) = \frac{x^2 + x - 6}{2x^2 + 7x + 3}$. If “h” is the number of horizontal, “v” is the number of vertical, and “s” the number of slant asymptotes, what is the ordered triple (h, v, s) ?

11. How many vertical asymptotes does $f(x) = \frac{4}{x^2 + 1}$ have?

12. The graph of $y = \frac{3x^3 + x^2 + 4}{x^2 - 48}$ in the cartesian plane has asymptotes $x = a$, $x = b$, and $y = cx + d$.

Evaluate the value of $a \times b \times c \times d$.

13. How many integers are in the range of the function $f(x) = \frac{4x^2 + 75}{2x^2 + 3}$?

14. The function "f" is defined by: $f(x) = \frac{ax + b}{cx + d}$ where a, b, c, and d are non-zero real integers and have the

properties: $f(19) = 19$, $f(97) = 97$, and $f(f(x)) = x$ for all values of "x" except $\frac{-d}{c}$. Find the

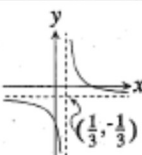
unique number that is not in the range of "f" (AIME)

15. Challenge: Let $f(x) = \sqrt{ax^2 + bx}$. For how many real values "a" is there at least one positive value of "b" for which the domain of "f" and the range of "f" are the same set? AMC 12 2003 #25

- 6-6. For what number k can the graph of $y = \frac{x-3}{1-3x}$ be transformed into the graph of $xy = k$ by a translation? [NOTE: If a translation moves every point a units horizontally and b units vertically, then the translation transforms the point (x,y) into the point $(x+a, y+b)$.]

Problem 6-6

The graph is known to be a hyperbola with vertical asymptote $x = 1/3$ and horizontal asymptote $y = -1/3$.



Method I: Look at the equation that results after shifting axes to coincide with the asymptotes, so that $(\frac{1}{3}, -\frac{1}{3})$ is the origin of the translated coordinate system. Then (x,y) of the original coordinate system becomes (x',y') in the new coordinate system, where $x' = x - \frac{1}{3}$ and $y' = y + \frac{1}{3}$. For example, $(x,y) = (\frac{1}{3}, -\frac{1}{3})$ in the original coordinate system becomes $(x',y') = (0,0)$ in the new coordinate system. Using the substitutions $x = x' + \frac{1}{3}$ and $y = y' - \frac{1}{3}$, we get $y' - \frac{1}{3} = \frac{x' + \frac{1}{3} - 3}{-3x'}$. Now, if we clear fractions and simplify, we'll get $x'y' = \frac{8}{9}$.

Method II: Using long division, $y = -\frac{1}{3} + \frac{8}{3(3x-1)}$; so $y + \frac{1}{3} = \frac{8}{9(x - \frac{1}{3})}$, or $(x - \frac{1}{3})(y + \frac{1}{3}) = \frac{8}{9}$.

Method III: Let $(x+a)(y+b) = k$. Then, $y(x+a) = k - bx - ab$, so $y = \frac{k - bx - ab}{x+a}$. But, $y = \frac{x-3}{1-3x} = \frac{-x/3+1}{-1/3+x}$, so $\frac{-x/3+1}{-1/3+x} = \frac{k - bx - ab}{x+a}$. Equate denominators to get $a = -\frac{1}{3}$. Thus, $\frac{-x/3+1}{-1/3+x} = \frac{k - bx + b/3}{x - 1/3}$. Now equate numerators to get $k - bx + \frac{b}{3} = -\frac{x}{3} + 1$. Since the coefficients of x must be equal, $-bx = -\frac{x}{3}$, and $b = \frac{1}{3}$. Finally, $k - \frac{x}{3} + \frac{1}{9} = -\frac{x}{3} + 1$, so $k = \frac{8}{9}$.

25. Let $f(x) = \sqrt{ax^2 + bx}$. For how many real values of a is there at least one positive value of b for which the domain of f and the range of f are the same set?

(A) 0 (B) 1 (C) 2 (D) 3 (E) infinitely many

25. (C) The domain of f is $\{x \mid ax^2 + bx \geq 0\}$. If $a = 0$, then for every positive value of b , the domain and range of f are each equal to the interval $[0, \infty)$, so 0 is a possible value of a .

If $a \neq 0$, the graph of $y = ax^2 + bx$ is a parabola with x -intercepts at $x = 0$ and $x = -b/a$. If $a > 0$, the domain of f is $(-\infty, -b/a] \cup [0, \infty)$, but the range of f cannot contain negative numbers. If $a < 0$, the domain of f is $[0, -b/a]$. The maximum value of f occurs halfway between the x -intercepts, at $x = -b/2a$, and

$$f\left(-\frac{b}{2a}\right) = \sqrt{a\left(\frac{b^2}{4a^2}\right) + b\left(-\frac{b}{2a}\right)} = \frac{b}{2\sqrt{-a}}.$$

Hence, the range of f is $[0, b/2\sqrt{-a}]$. For the domain and range to be equal, we must have

$$-\frac{b}{a} = \frac{b}{2\sqrt{-a}} \quad \text{so} \quad 2\sqrt{-a} = -a.$$

The only solution is $a = -4$. Thus there are two possible values of a , and they are $a = 0$ and $a = -4$.

8. The vertical asymptote and horizontal asymptote for $f(x) = \frac{\sqrt{x}}{x+4}$ are

- (a) $x = -4, y = 0$ (b) no vertical asymptote, $y = 0$ (c) no vertical or horizontal asy
 (d) $x = -4$, no horizontal asymptote (e) $x = -4, y = 1$

\

1 Find the vertical asymptotes:

$$f(x) = \frac{2x^3 + 12x^2 + 22x + 12}{x^2 + 6x + 8}$$

Consider the function: $f(x) = \frac{x^2 + x - 6}{2x^2 + 7x + 3}$. If h is the number of horizontal, v the number of vertical, and s the number of slant asymptotes, what is the ordered triple (h, v, s) ?

The first three terms of a geometric sequence are: $\sqrt{3}, \sqrt[3]{3}, \sqrt[6]{3}$; what is the next term?

1

How many vertical asymptotes does $f(x) = \frac{4}{x^2 + 1}$ have?

Read as: How many vertical asymptotes does f of x equals 4 divided by the quantity x squared plus 1 have?

How many integers are in the range of the function $y(x) = \frac{4x^2 + 75}{2x^2 + 3}$?

The graph of $y = \frac{3x^3 + x^2 + 4}{x^2 - 48}$ in the Cartesian plane has asymptotes $x = a, x = b$, and $y = cx + d$. Evaluate $abcd$.
